



quadern de  
**matemàtiques**



**Multiplicacions per  
dues i tres xifres.**

# quadern de matemàtiques

# 8

## projecte educatiu Faro



Este llibre està imprès sobre paper reciclable,  
ecològic, lliure de clor, i contribueix al  
desenvolupament sostenible dels boscos.

**Il·lustració:**

Gustavo Otero

**Edició:**

Equip Dylar

**Maquetació:**

copion

**Impressió:**

Brosmac, S.L.

**ISBN Quadern:** 978-84-95280-58-9



**Dipòsit Legal:**

© Projecte educatiu Faro.



www.dylar.es  
e-mail: dylar@dylar.es  
Tel.: 902 44 44 13

1 Calcola.



-36



2 Completa el quadre.

x	3	4	6	8
2				
5				
7				
9				

3 Multiplica.

$$\begin{array}{r} 21 \\ \times 12 \\ \hline 42 \\ + 21 \\ \hline 252 \end{array}$$

$$\begin{array}{r} 32 \\ \times 12 \\ \hline \end{array}$$

$$\begin{array}{r} 63 \\ \times 14 \\ \hline \end{array}$$

$$\begin{array}{r} 84 \\ \times 16 \\ \hline \end{array}$$

$$\begin{array}{r} 17 \\ \times 13 \\ \hline \end{array}$$

$$\begin{array}{r} 26 \\ \times 15 \\ \hline \end{array}$$

$$\begin{array}{r} 47 \\ \times 15 \\ \hline \end{array}$$

$$\begin{array}{r} 58 \\ \times 12 \\ \hline \end{array}$$

$$\begin{array}{r} 69 \\ \times 15 \\ \hline \end{array}$$



4 Multiplica.

$$\begin{array}{r} 26 \\ \times 18 \\ \hline \end{array}$$

$$\begin{array}{r} 44 \\ \times 19 \\ \hline \end{array}$$

$$\begin{array}{r} 53 \\ \times 21 \\ \hline \end{array}$$

$$\begin{array}{r} 72 \\ \times 22 \\ \hline \end{array}$$

$$\begin{array}{r} 81 \\ \times 23 \\ \hline \end{array}$$

$$\begin{array}{r} 29 \\ \times 24 \\ \hline \end{array}$$

$$\begin{array}{r} 38 \\ \times 25 \\ \hline \end{array}$$

$$\begin{array}{r} 57 \\ \times 26 \\ \hline \end{array}$$

$$\begin{array}{r} 76 \\ \times 27 \\ \hline \end{array}$$

$$\begin{array}{r} 95 \\ \times 28 \\ \hline \end{array}$$

5 Escriu amb nombres romans.



- |     |     |
|-----|-----|
| 2=  | 3=  |
| 4=  | 5=  |
| 6=  | 7=  |
| 8=  | 9=  |
| 10= | 11= |

6 Completa el rellotge.



7 Col·loca i multiplica.

$41 \times 31$

$65 \times 32$

$77 \times 33$

$89 \times 34$

$$\begin{array}{r} 41 \\ \times 31 \\ \hline \end{array}$$

$$\begin{array}{r} 65 \\ \times \dots\dots \\ \hline \end{array}$$

$$\begin{array}{r} \dots\dots \\ \times \dots\dots \\ \hline \end{array}$$

$$\begin{array}{r} \dots\dots \\ \times \dots\dots \\ \hline \end{array}$$

$$\begin{array}{r} \dots\dots \\ + \dots\dots \\ \hline \end{array}$$

$$\begin{array}{r} \dots\dots \\ + \dots\dots \\ \hline \end{array}$$

$$\begin{array}{r} \dots\dots \\ + \dots\dots \\ \hline \end{array}$$

$$\begin{array}{r} \dots\dots \\ + \dots\dots \\ \hline \end{array}$$



8 Descompon els nombres.

$$736 = 700 + 30 + 6$$

$$815 = 800 +$$

$$902 =$$

$$1347 =$$

$$2650 =$$

$$3003 =$$

10 Multiplica.


$$\begin{array}{r} 86 \\ \times 35 \\ \hline \end{array}$$

$$\begin{array}{r} 36 \\ \times 23 \\ \hline \end{array}$$

$$\begin{array}{r} 45 \\ \times 38 \\ \hline \end{array}$$

$$\begin{array}{r} 46 \\ \times 43 \\ \hline \end{array}$$

$$\begin{array}{r} 68 \\ \times 49 \\ \hline \end{array}$$



9 Completa.



$$\begin{array}{r} 56 \\ \times 39 \\ \hline \end{array}$$

$$\begin{array}{r} 74 \\ \times 57 \\ \hline \end{array}$$

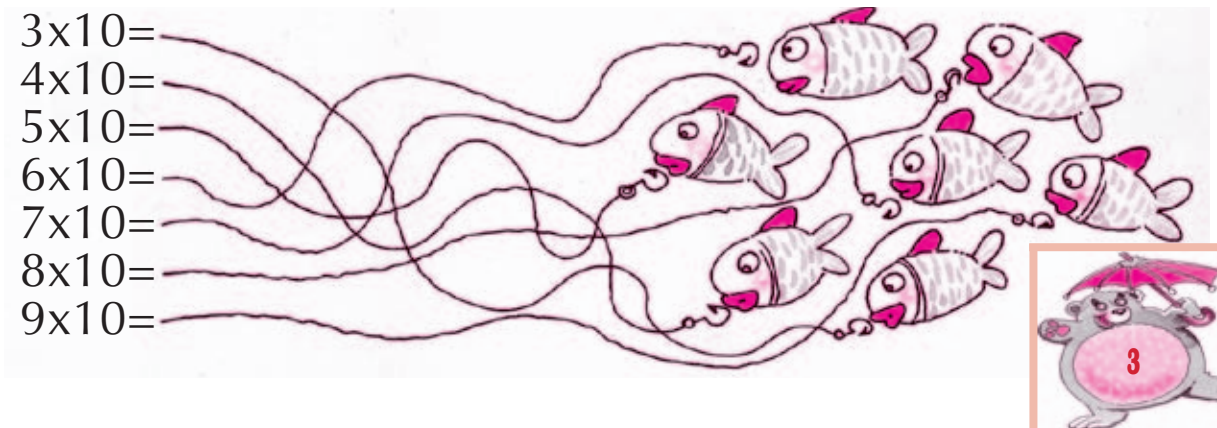
$$\begin{array}{r} 82 \\ \times 57 \\ \hline \end{array}$$

$$\begin{array}{r} 98 \\ \times 48 \\ \hline \end{array}$$

$$\begin{array}{r} 67 \\ \times 41 \\ \hline \end{array}$$

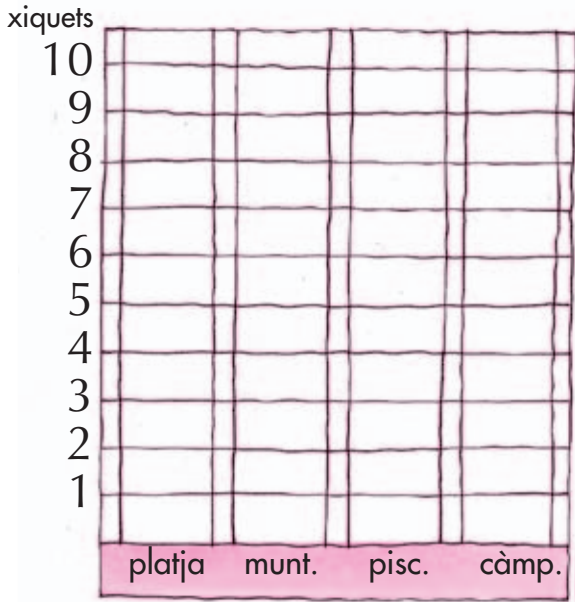
11 Busca el camí i escriu el resultat.

- 3x10=
- 4x10=
- 5x10=
- 6x10=
- 7x10=
- 8x10=
- 9x10=




12 Representa en el gràfic.

Lloc:	platja	mntanya	piscina	càmping
xiquets:	8	4	7	5



13 Completa la taula. Quins animals hi ha i quants de cada classe?



animal:				
nombre:				

14 Multiplica.

$$\begin{array}{r} 88 \\ \times 43 \\ \hline \end{array}$$

$$\begin{array}{r} 29 \\ \times 30 \\ \hline \end{array}$$

$$\begin{array}{r} 37 \\ \times 24 \\ \hline \end{array}$$

$$\begin{array}{r} 99 \\ \times 42 \\ \hline \end{array}$$

$$\begin{array}{r} 71 \\ \times 44 \\ \hline \end{array}$$

$$\begin{array}{r} 62 \\ \times 45 \\ \hline \end{array}$$

$$\begin{array}{r} 54 \\ \times 46 \\ \hline \end{array}$$

$$\begin{array}{r} 66 \\ \times 52 \\ \hline \end{array}$$

$$\begin{array}{r} 53 \\ \times 27 \\ \hline \end{array}$$

$$\begin{array}{r} 54 \\ \times 39 \\ \hline \end{array}$$



$$\begin{array}{r} 95 \\ \times 51 \\ \hline \end{array}$$

$$\begin{array}{r} 38 \\ \times 24 \\ \hline \end{array}$$

$$\begin{array}{r} 59 \\ \times 14 \\ \hline \end{array}$$

$$\begin{array}{r} 61 \\ \times 25 \\ \hline \end{array}$$



15 Calcula.

$$\begin{array}{r} 78 \\ \times 62 \\ \hline \end{array}$$

$$\begin{array}{r} 93 \\ \times 63 \\ \hline \end{array}$$

$$\begin{array}{r} 74 \\ \times 17 \\ \hline \end{array}$$

$$\begin{array}{r} 85 \\ \times 72 \\ \hline \end{array}$$

$$\begin{array}{r} 64 \\ \times 64 \\ \hline \end{array}$$

$$\begin{array}{r} 76 \\ \times 71 \\ \hline \end{array}$$





$$\begin{array}{r} 65 \\ \times 35 \\ \hline \end{array}$$

$$\begin{array}{r} 84 \\ \times 75 \\ \hline \end{array}$$

$$\begin{array}{r} 73 \\ \times 15 \\ \hline \end{array}$$

$$\begin{array}{r} 75 \\ \times 19 \\ \hline \end{array}$$

16 Completa.

	x	4	=	24
x		x		x
2	x		=	
=		=		=
	x		=	240

17 Calcula.



18 Realitza els càlculs.

$$5 \times 3 + 6 = \quad 5 \times 10 = \quad 7 \times 4 + 5 =$$

$$(7 + 4) \times 3 = \quad (4 + 5) \times 2 =$$

$$45 \times 10 =$$

$$36 \times 10 =$$

$$76 \times 10 = \quad 4 \times 8 - 9 =$$

$$(13 - 4) \times 8 =$$

$$(11 - 7) \times 6 = \quad 92 \times 10 =$$

$$17 \times 10 =$$

$$9 \times 6 - 8 =$$

$$86 \times 10 =$$



19 Multiplica.

$$\begin{array}{r} 92 \\ \times 69 \\ \hline \end{array}$$

$$\begin{array}{r} 81 \\ \times 39 \\ \hline \end{array}$$

$$\begin{array}{r} 76 \\ \times 29 \\ \hline \end{array}$$

$$\begin{array}{r} 87 \\ \times 67 \\ \hline \end{array}$$

$$\begin{array}{r} 66 \\ \times 16 \\ \hline \end{array}$$

$$\begin{array}{r} 97 \\ \times 68 \\ \hline \end{array}$$

$$\begin{array}{r} 79 \\ \times 66 \\ \hline \end{array}$$

$$\begin{array}{r} 77 \\ \times 32 \\ \hline \end{array}$$

$$\begin{array}{r} 78 \\ \times 48 \\ \hline \end{array}$$

$$\begin{array}{r} 95 \\ \times 25 \\ \hline \end{array}$$



20 Fixa't en els nombres.



Contesta:

El major nombre imparell de 3 xifres diferents és:

El major nombre parell de 3 xifres iguals és:

El menor nombre imparell de 3 xifres iguals és:

El menor nombre parell de 3 xifres diferents és:



21 Troba els nombres que falten.

$$\begin{array}{r} \square 9 \square \\ \times 7 \\ \hline 3 \square \square 5 \end{array}$$

$$\begin{array}{r} \square \square 4 \\ \times 8 \\ \hline 3 1 5 \square \end{array}$$

$$\begin{array}{r} \square 8 \square \\ \times 6 \\ \hline 4 6 \square 8 \end{array}$$



$$\begin{array}{r} \square 7 5 \\ \times \square \\ \hline 1 3 \square 5 \end{array}$$

